

Ch=10

Time

Let US RECALL

Fill in the blanks:

1. Saturday comes in between Friday and Sunday.
2. July comes in between June and August.
3. November has 30 days.
4. Summer season comes between autumn and spring.
5. Tuesday comes in between Monday and Wednesday.
6. September comes before October.
7. January has 31 days.
8. Autumn season comes before winter.
9. Wednesday comes after Tuesday.
10. March comes before April.
11. September comes in between August and October.
12. In a year has 12 months and 7 month has 31 days
13. Friday comes before Saturday
14. Saturday comes in between Friday and Sunday.
15. October comes in between September and November.
16. February has 28 or 29 days.
17. Summer season comes after Spring.



EXERCISE 10.1

1. List out some activities and the time taken as below.

(a) Takes seconds : Blink, Greeting any one,
Breathing e.t.c

(b) Takes minutes : Singing, solve problems in
maths, taking bath e.t.c

Mathematics-III

(c) Takes hours : traveling one city to another,
Read a whole book, watch whole movie e.t.c

(d) Takes days : Rotation of earth, Going one
Country to another.

(e) Takes weeks : Build a room, growing a plant

(f) Takes months : Changing weather or Seasons
birth of small baby.

(g) Takes years : Revolution of the Sun,

2. Fill in the blanks:

(a) 3 minutes = 180 seconds (b) 12 minutes = 720 seconds

(c) 7 hours = 420 minutes (d) 18 hours = 1080 minutes

(e) 9 days = 216 hours (f) 13 days = 312 hours


(g) 4 weeks = 28 days (h) 15 weeks = 105 days



EXERCISE 10.2

1. Read the clock and write the time correctly in two ways in the space provided.


(a)



5:00

5 o'clock


(b)



10:00

10 o'clock

(c)




8:00


8 o'clock

2. Draw the hands on the clock to show the correct time.

(a) 6 o'clock



(b) 7 o'clock



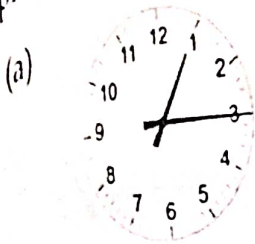
(c) 11 o'clock



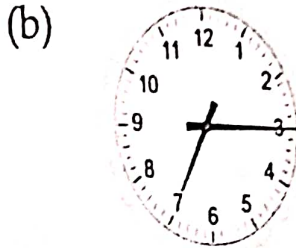


EXERCISE 10.3

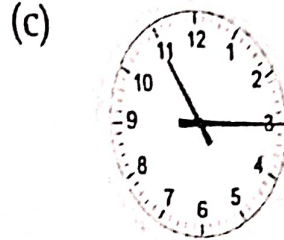
1. Read the clock and write the time correctly in two ways in the space provided.



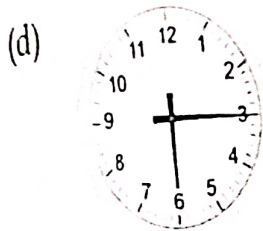
Quarter past 1
1 : 15



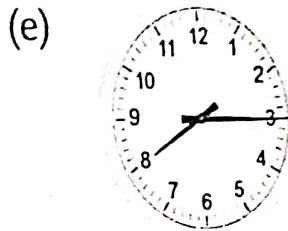
Quarter past 7
7 : 15



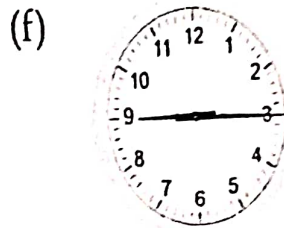
Quarter past 11
11 : 15



Quarter past 6
6 : 15






Quarter past 8
8 : 15



Quarter past 9
9 : 15

2. Draw the hands on the clock to show the correct time.

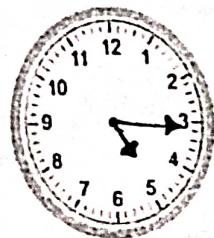


(a) Quarter past 2 (b) Quarter past 10 (c) Quarter past 4



(d) 3:15

(e) 12:15

(f) 05:15






EXERCISE 10.4

1. Read the clock and write the time correctly in two ways in the space provided.

(a)



Half past 3

3 : 30

(b)



Half past 7

7 : 30

(c)



Half past 5

5 : 30

(d)



Half past 10

10 : 30

(e)



Half past 8

8 : 30

(f)

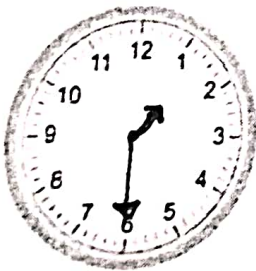


Half past 11


11 : 30

2. Draw the hands on the clock to show the correct time.


(a) 1:30




(b) 12:30




(c) 09:30




(d) Half past 2



(e) Half past 6



(f) Half past 4





EXERCISE 10.5


1. Read the clock and write the time correctly in two ways in the space provided.

(a)



Four quarters past 2
2:45

(b)




Eight quarters past 6
6:45

(c)




Ten quarters past 10
10:45

(d)




Five quarters past 5
5:45

(e)



Eight quarters past 6
6:45

(f)




Eleven quarters past 11
11:45

2. Draw the hands on the clock to show the correct time.


(a)

01:45




(b)

4:45



(c)

12:45





REVIEW EXERCISE

1. Give one activity each which:

- (a) takes seconds: blinking
- (b) takes minutes: taking bath
- (c) takes hours: Watching movie
- (d) takes days: going one country to another
- (e) takes weeks: build a room.
- (f) takes months: birth of baby
- (g) takes years: Revolution of the Sun.

2. Fill in the blanks:

- (a) 2 minutes = 120 seconds
- (b) 5 hours = 300 minutes.
- (c) 3 days = 72 hours
- (d) 4 weeks = 28 days
- (e) 3 months = 90 days
- (f) 6 years = 312 weeks
- (g) 3 years = 36 months
- (h) 6 years = 2190 days

3. Read the clock and write the time correctly in two ways in the space provided.

(a)



8 o'clock

8:00

(b)



Quarter past 5

5:15


(c)



Half past 9

9:30

(d)

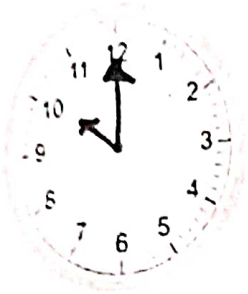


Quarter to 5


4:45

4. Draw the hands on the clock to show the given time.


(a) 10:00




(b) 3:00




(c) 11:15




(d) Quarter past 6



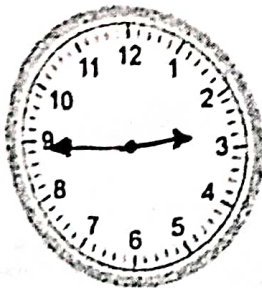
(e) 12:30



(f) Half past 7



(g) 02:45



(h) Quarter to 2

